



1. Write the key signature and **tonic** triad for each of these keys. Write the functional chord symbol below.

	A major	C minor	F minor	G major	E major	D minor
--	---------	---------	---------	---------	---------	---------

/6 


2. Write the key signature and **subdominant** triad for each of these keys. Write the functional chord symbol below.

	D major	F# minor	Eb major	C major	G minor	Bb major
--	---------	----------	----------	---------	---------	----------

/6 

3. Write the key signature and **dominant** triad for each of these keys. Write the functional chord symbol below.


	A minor	E minor	F major	C# minor	A major	D major
--	---------	---------	---------	----------	---------	---------

/6 


/18 _____

4. Use these root quality chord symbols to write triads underneath. Use accidentals instead of a key signature.

	A	Gm	Fm	D	Ab	C#m
--	---	----	----	---	----	-----

/6 

	E	Em	F	Eb	Bm	F#m
--	---	----	---	----	----	-----

/6 

/12 _____